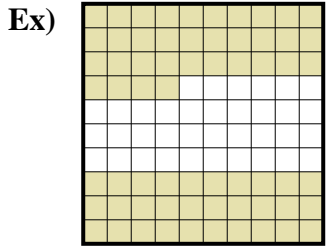
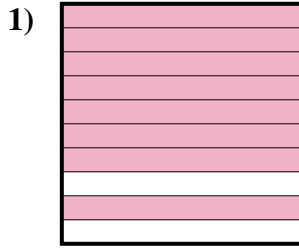




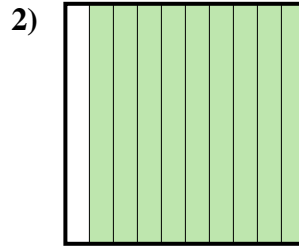
Determine the value written as a fraction , decimal & a percent.



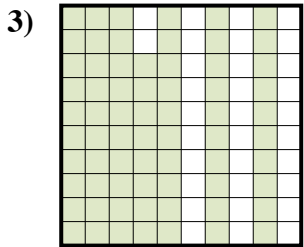
Fraction $\frac{64}{100}$
 Decimal 0.64
 Percent 64%



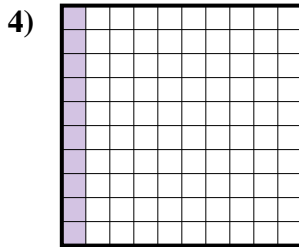
Fraction _____
 Decimal _____
 Percent _____



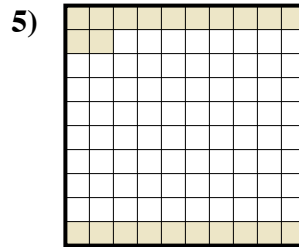
Fraction _____
 Decimal _____
 Percent _____



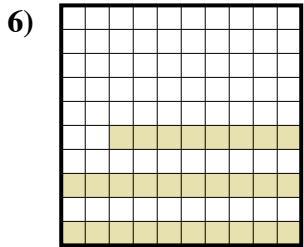
Fraction _____
 Decimal _____
 Percent _____



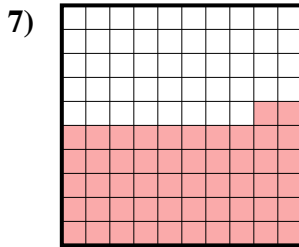
Fraction _____
 Decimal _____
 Percent _____



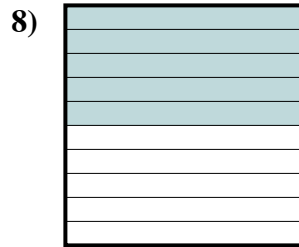
Fraction _____
 Decimal _____
 Percent _____



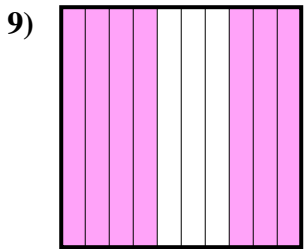
Fraction _____
 Decimal _____
 Percent _____



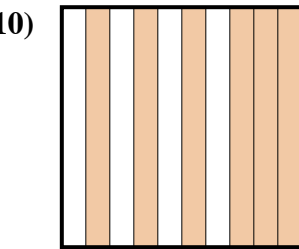
Fraction _____
 Decimal _____
 Percent _____



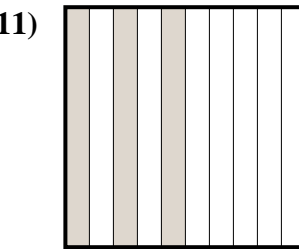
Fraction _____
 Decimal _____
 Percent _____



Fraction _____
 Decimal _____
 Percent _____



Fraction _____
 Decimal _____
 Percent _____



Fraction _____
 Decimal _____
 Percent _____

Answers

Ex. $\frac{64}{100}$ 0.64 64%

1. _____

2. _____

3. _____

4. _____

5. _____

6. _____

7. _____

8. _____

9. _____

10. _____

11. _____